




Abakus mental arithmetics



GET YOUR
FREE LESSON



Some Chinese numerals and examples are given.
Try to understand what each hieroglyph means
(Numbers are less than 10)

二 + 二 = 四 + =

四 + 二 = 六 + =

三 + 三 = 六 + =

四 + 四 = 八 + =


六 + 一 = 七 + =

一 + 八 = 九 + =

二 + 三 = 五 + =

五 + 一 = 六 + =

八	七	六	五	四	三	=	-	九
		6						

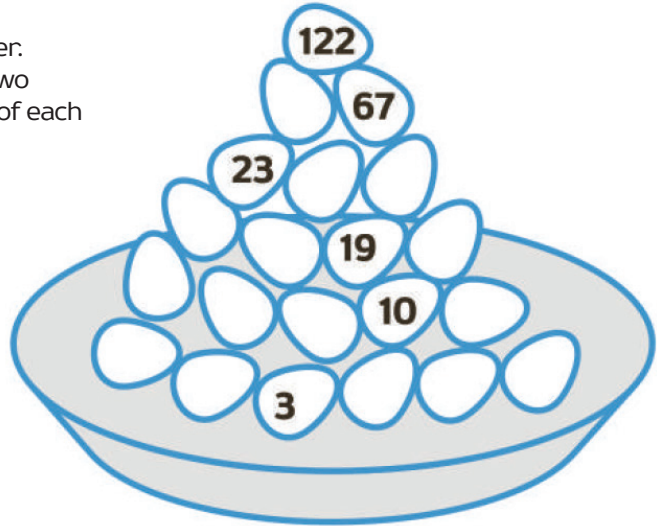


GET YOUR
FREE LESSON



Let's solve the egg
pyramid

Each egg must have a specific number.
Each number equals to the sum of two
numbers below. Calculate the value of each
egg with the help of the abacus



Let's solve the problem
of laying hens

How long will it take 100 hens to lay 100 eggs
if 5 hens lay 5 eggs in 5 minutes?

